

**ARMY PUBLIC SCHOOL BINNAGURI**  
**SUMMER VACATION - HOLIDAY HOMEWORK**  
**MATHS**  
**CLASS – I**

1. Write the missing numbers.

A. 5 \_\_\_\_\_ 7 \_\_\_\_\_

B. \_\_\_\_\_ 3 \_\_\_\_\_

C. 6 \_\_\_\_\_ 8 \_\_\_\_\_ 10

D. 11 \_\_\_\_\_ 13 \_\_\_\_\_ 15

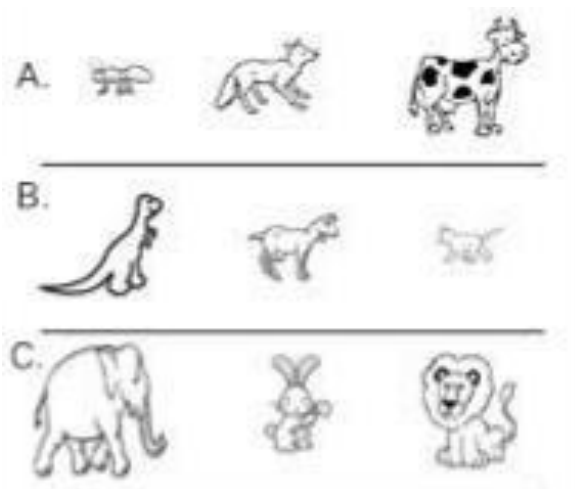
2. Draw a star on the top of the Christmas tree. Colour and decorate the tree.



3. Draw a smiley at the bottom of the board.



4. Circle the biggest and cross the smallest.



5. Write the number names.

A. 10=

B. 8=


C. 11=

D. 7=

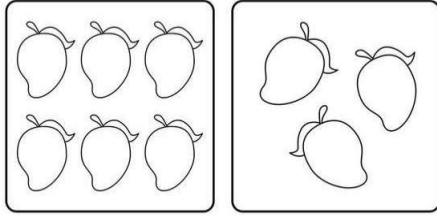
E. 3=

6. Tick (✓) the group which has less.

A.



B.



7. Put the sign  $>$  or  $<$  in the boxes.

A. 6  9

B. 10  7







C. 5  8

D. 7  1

8. In the word HONESTY, which is the third alphabet?

Ans:

9. Count and add.

	+		=
<hr/>			
	+		=
<hr/>			
	+		=

10. Add the following numbers by drawing strokes.

A. 
$$\begin{array}{r} 8 \\ +1 \\ \hline \end{array}$$

=

B. 
$$\begin{array}{r} 6 \\ +4 \\ \hline \end{array}$$

=

11. Add the following by drawing the number line.

A.  $3+7=$


B.  $6+2=$



12. I have 5 colour pencils. I got 4 more.

In all, I have \_\_\_\_\_ pencils.

13. There are 3 flowers. 4 more are added.



In all, there are \_\_\_\_\_ flowers.

- **Activity:** Take a piece of chart paper. Draw a tree. Draw a bird flying **above** the tree and a cat **below** the tree. Draw a bee **near** the tree.